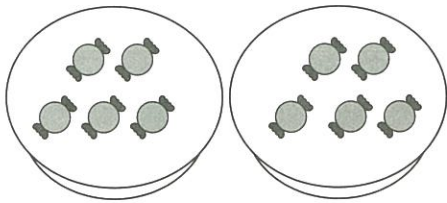


- 1 小朋友可以抓兩次糖果，數一數，每次的糖果有多少？兩次合起來的數目又是多少？分別寫在□內。


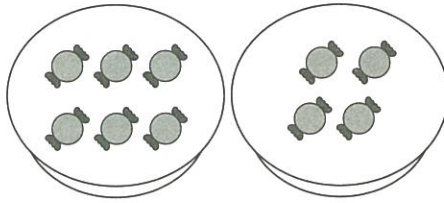


↓ ↓

□ □

↘ ↙

□


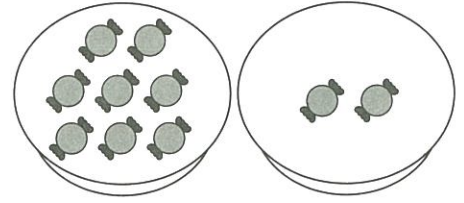



↓ ↓

□ □

↘ ↙

□


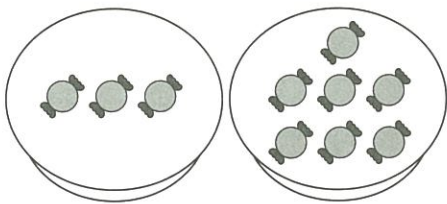



↓ ↓

□ □

↘ ↙

□


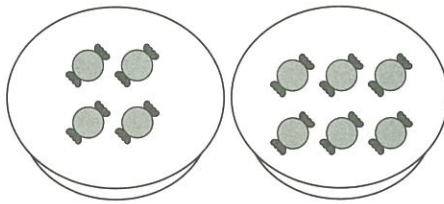



↓ ↓

□ □

↘ ↙

□


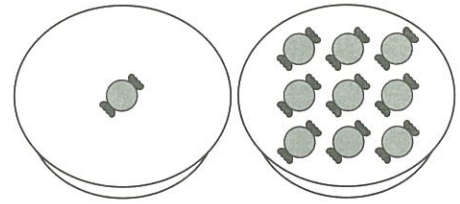



↓ ↓

□ □

↘ ↙

□

↓ ↓

□ □

↘ ↙

□

